



GUDRUČIO

užduočių knygelė

Nuspalvink skaičius ir pamatyk kas paslėpta

3	3	3	3	3	3	4	4	4	4	4	4	4	3	3	3	3	3	3	3	3	3	3	3
3	3	3	3	3	4	4	4	4	4	4	4	3	3	3	3	3	3	3	3	3	3	3	3
3	3	3	4	4	4	4	4	6	5	5	5	3	3	3	3	3	3	3	3	3	3	3	3
3	4	4	4	4	4	6	6	6	1	1	2	2	6	6	5	3	3	3	3	3	3	3	3
4	4	4	4	4	2	2	1	1	1	1	2	2	2	1	6	5	3	3	3	3	5	5	3
4	4	4	4	2	2	2	1	1	1	2	2	2	1	1	1	5	3	3	3	1	1	5	3
4	3	3	1	1	2	2	2	1	1	2	2	1	1	1	1	2	2	1	1	1	1	5	3
3	3	1	1	1	1	2	2	1	1	6	6	5	1	1	1	2	2	2	1	1	5	3	
3	3	1	5	1	1	2	2	6	6	6	6	5	1	1	1	2	2	2	1	1	5	3	
3	3	1	1	1	1	2	2	6	6	6	6	5	1	1	1	2	2	1	1	1	1	5	
3	3	1	1	1	1	2	2	1	5	5	5	1	1	1	1	2	5	4	4	1	1	5	
4	4	4	1	1	2	2	1	1	1	2	2	2	1	1	1	5	4	4	4	4	5	5	
4	4	4	4	4	2	2	1	1	1	1	2	2	2	6	5	4	4	4	4	4	4	4	
4	4	4	4	4	4	4	6	6	6	4	4	6	6	5	4	4	4	4	4	4	4	4	
4	4	3	3	3	4	4	4	4	4	4	4	4	4	4	4	3	3	3	3	3	3	4	
3	3	3	3	3	3	3	3	4	4	4	4	4	4	3	3	3	3	3	3	3	3	3	



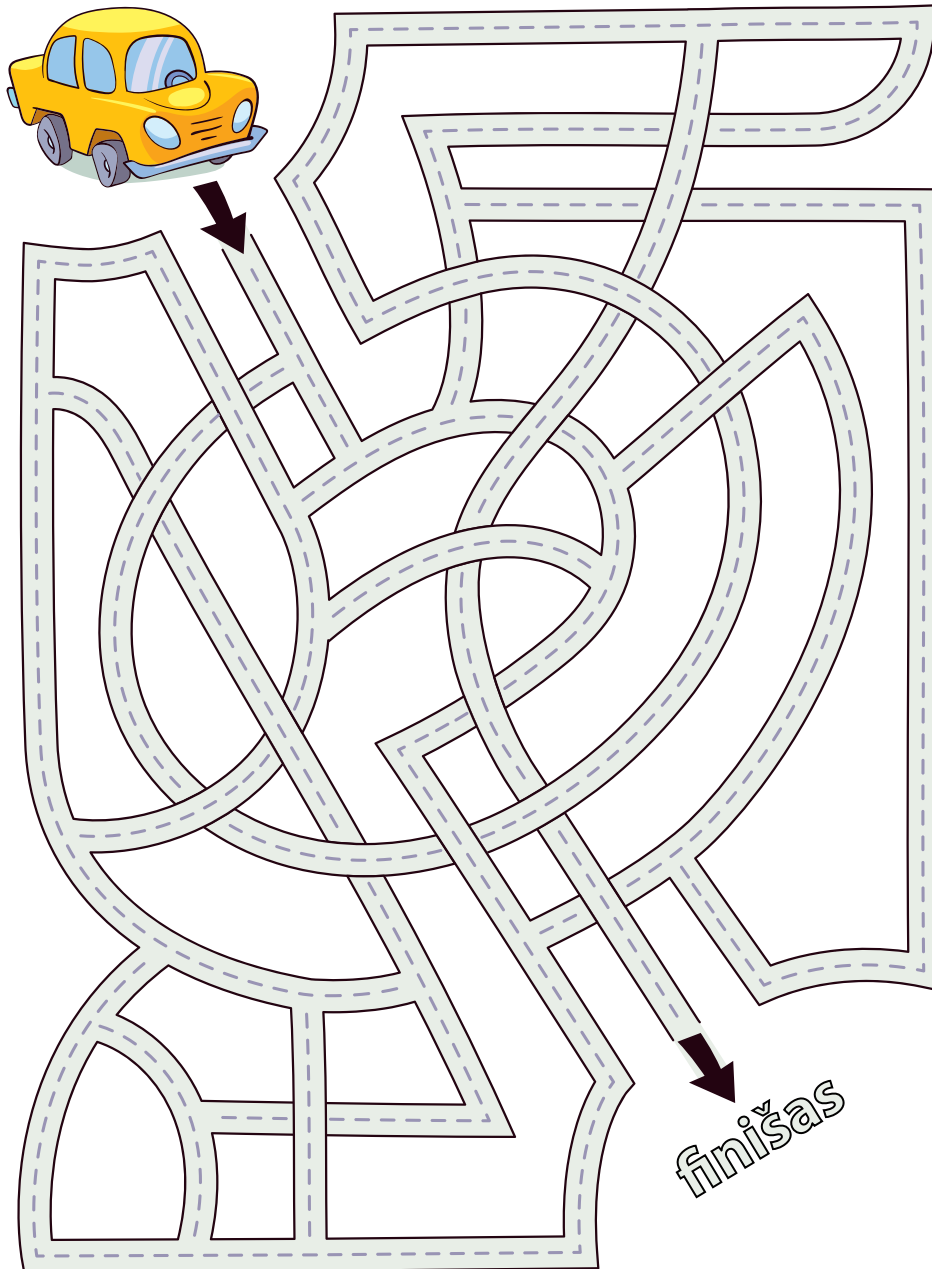
Surask 12 paslėptų dalykų




- 
- 
- 
- 
- 
- 
- 
- 
- 
- 
- 
- 





Padēk vairotoju pasiekti finišu




Nuspalvink skaičius



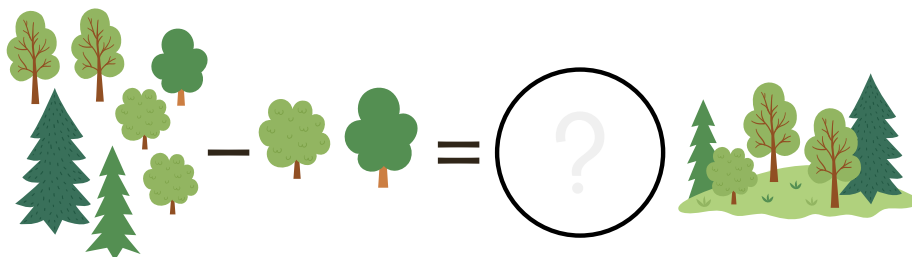
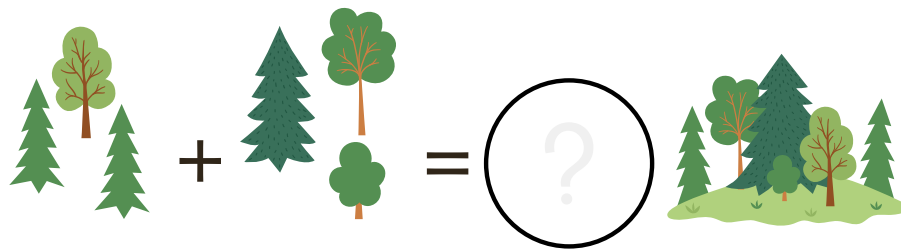
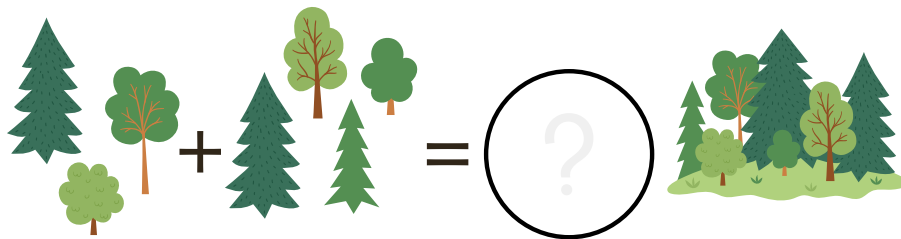
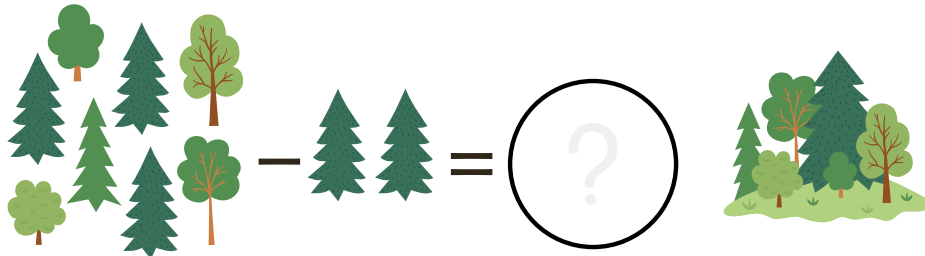
Suskaičiuok oro baliono keliautojus



Surask dvi vienodas kates ir 12 paslėptų žuvyčių



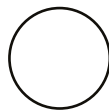
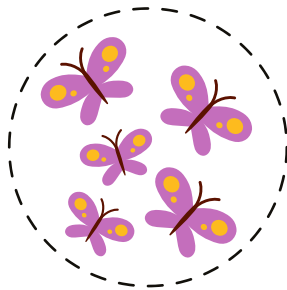
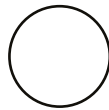
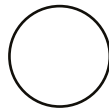


Suskaičiuok medelius




Daugiau, mažiau arba lygu

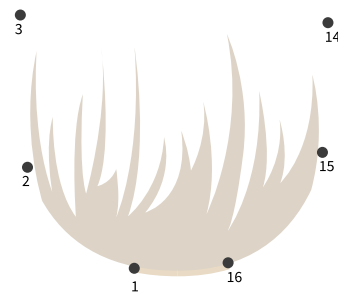

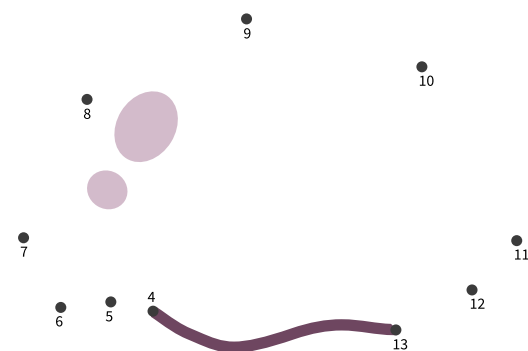

><=




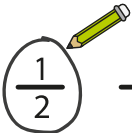
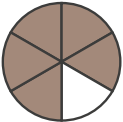
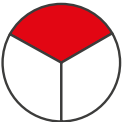


Surask 10 skirtumų








Sujunk taškus ir nuspalvink





Apibrauk teisingą atsakymą

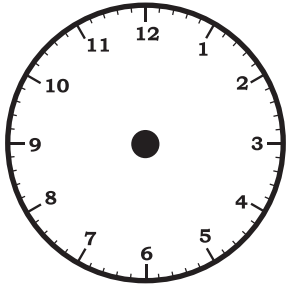
	$\frac{3}{1}$	$\frac{2}{1}$	$\frac{1}{2}$ 	$\frac{3}{2}$
	$\frac{3}{1}$	$\frac{6}{5}$	$\frac{6}{7}$	$\frac{5}{6}$
	$\frac{1}{3}$	$\frac{3}{1}$	$\frac{2}{3}$	$\frac{4}{1}$
	$\frac{4}{6}$	$\frac{5}{4}$	$\frac{3}{5}$	$\frac{5}{3}$
	$\frac{6}{8}$	$\frac{5}{8}$	$\frac{8}{5}$	$\frac{5}{7}$

	$\frac{4}{1}$	$\frac{1}{4}$	$\frac{1}{3}$	$\frac{3}{4}$
	$\frac{4}{10}$	$\frac{5}{12}$	$\frac{3}{11}$	$\frac{3}{10}$
	$\frac{4}{8}$	$\frac{7}{4}$	$\frac{4}{6}$	$\frac{4}{7}$
	$\frac{4}{10}$	$\frac{4}{12}$	$\frac{4}{14}$	$\frac{6}{12}$
	$\frac{1}{2}$	$\frac{3}{6}$	$\frac{6}{4}$	$\frac{4}{6}$

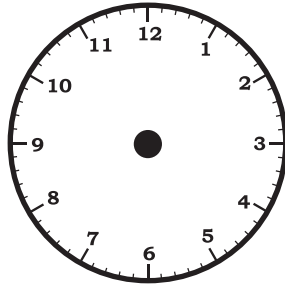
Surask tinkamas dalis



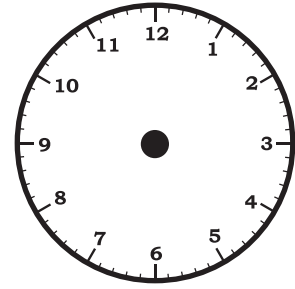
Nupaišyk laikrodžio rodykles



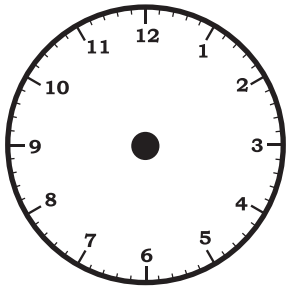
1:30



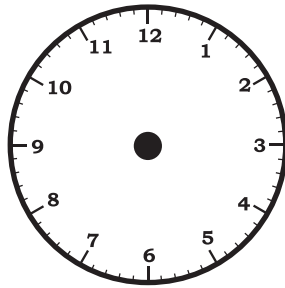
5:00



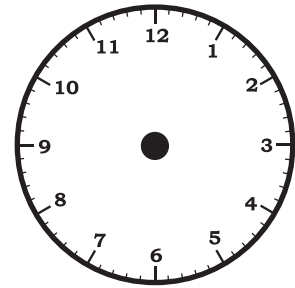
3:15



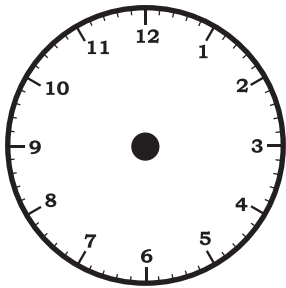
12:30



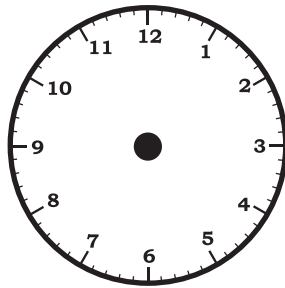
6:45



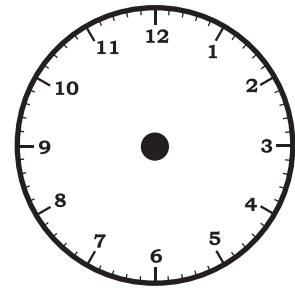
7:30



11:00



8:15




2:30




Atsakymai

2 puslapis



3 puslapis



5 puslapis



7 puslapis



12 puslapis

	$\frac{3}{1}$	$\frac{2}{1}$	$\frac{1}{2}$	$\frac{3}{2}$
	$\frac{3}{1}$	$\frac{6}{5}$	$\frac{6}{7}$	$\frac{5}{6}$
	$\frac{1}{3}$	$\frac{3}{1}$	$\frac{2}{3}$	$\frac{4}{1}$
	$\frac{4}{6}$	$\frac{5}{4}$	$\frac{3}{5}$	$\frac{5}{3}$
	$\frac{6}{8}$	$\frac{5}{8}$	$\frac{8}{5}$	$\frac{5}{7}$

	$\frac{4}{1}$	$\frac{1}{4}$	$\frac{1}{3}$	$\frac{3}{4}$
	$\frac{4}{10}$	$\frac{5}{12}$	$\frac{3}{11}$	$\frac{3}{10}$
	$\frac{4}{8}$	$\frac{7}{4}$	$\frac{4}{6}$	$\frac{4}{7}$
	$\frac{4}{10}$	$\frac{4}{12}$	$\frac{4}{14}$	$\frac{6}{12}$
	$\frac{1}{2}$	$\frac{3}{6}$	$\frac{6}{4}$	$\frac{4}{6}$

